


MATHEMATICS
CH-3 ADDITION

Name: _____


Date: _____

Class: I Sec: _____


1. Find how many altogether :



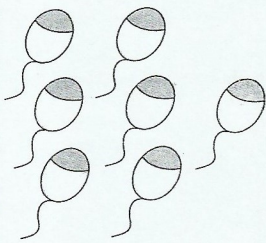
+



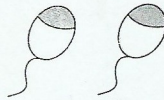
=



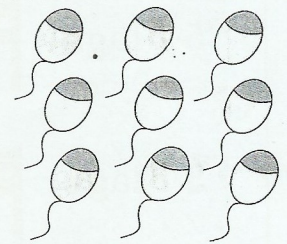
Flowers




+



=




Balloons




+



=




Ice creams



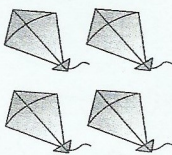
+



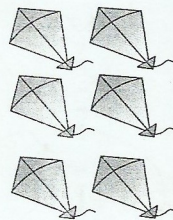
=



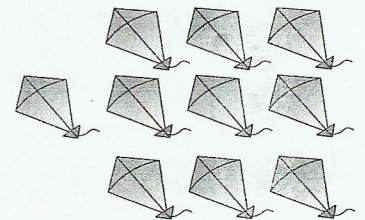
Trees



+



=

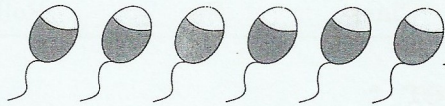


Kites

Write the answer (2 - 3) :

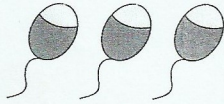
2.

6 balloons



6

3 balloons



+ 3

How many in all?

=

Balloons

3.

5 Flags



5

3 Flags



+ 3

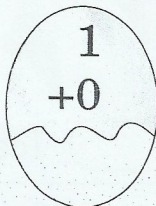
How many in all?

=

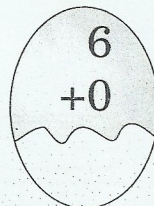
Flags

4. Fill in the balloons :

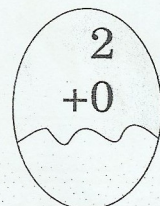
1.



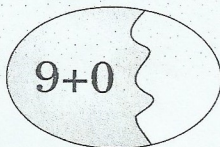
2.



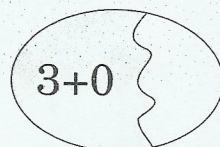
3.



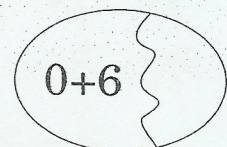
4.



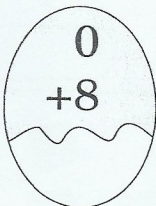
5.




6.



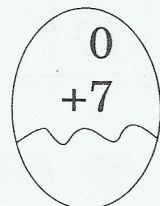
7.



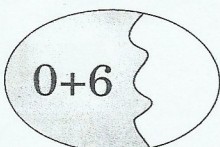
8.



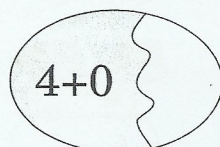
9.



10.



11.



12.

